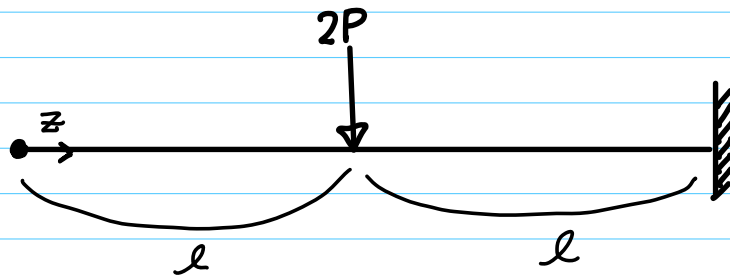
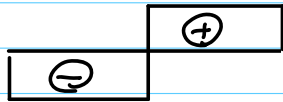


# 小テスト第6回

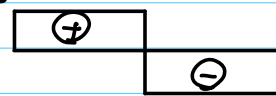


問3: S図 (上が正) の概形を選びなさい

①



②



③



④



⑤



⑥



⑦



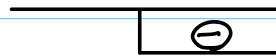
⑧



⑨

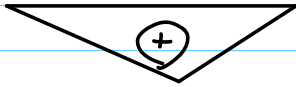


⑩

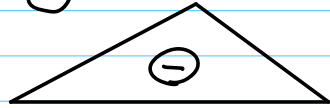


問4: M図(下が正)の概形を選べ

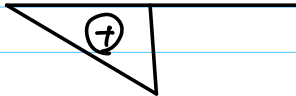
①



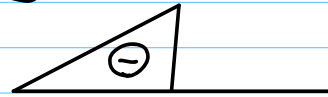
②



③



④



⑤



⑥




⑦



⑧



⑨



⑩

